



Diag.1




Cerny prave zahral 37. ... Jc6 a casova tisen je na krku. Jak ma bily reagovat?

Diag.2




V predchozim prubehu bily odmtil nabidku remizy, ted o ni bojuje. Jak ma pokracovat?

Diag.3




Cerny ma tu nejvetsi drinu za sebou. Jak dilo dokonci?

Diag.4




K vyhre vede hned nekolik cest - kterou povazujete za nejjednodussi?

Diag.5




Cerny bojuje o remizu, zejmena kvuli spatne pozici sveho krale. Presto jeden tah v pozici umozni cernemu remizovat - ktery a proc?

Diag.6




Jak ma bily pokracovat? Cerny ma dve obranne strategie. Ktere to jsou a jak by bily v obou pripadech vyhral?

Diag.7




Cerny bojuje o remizu. Ma k dispozici jeden tah, ktery ho zachrani. Ktery tah to je a jaky je cerneho plan?

Diag.8



Standardni vyhryna pozice se strelcovym pescem. Jak bily na tahu vyhraje?

Diag.9



Jedna z obtiznych damskych koncovek. Kam ma cerny uhnout krale?